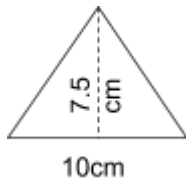


Date:

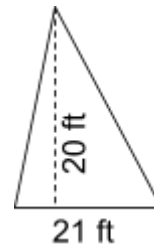
Grade 7: Math

3.5 Measurement: Area of Triangles

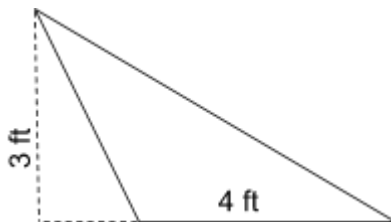
1.



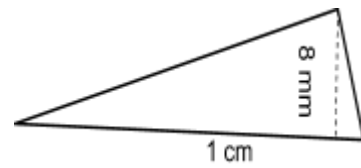
2.



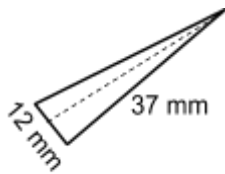
4.



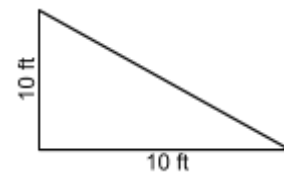
5.



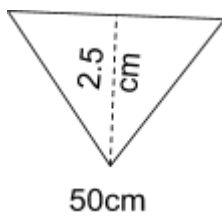
7.



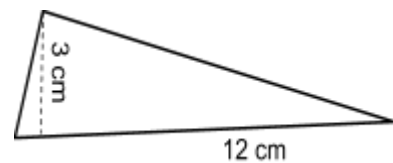
8.



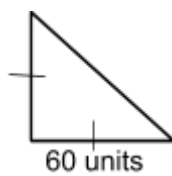
10.



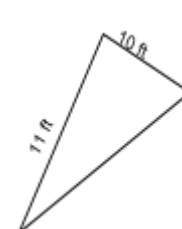
11.



13.

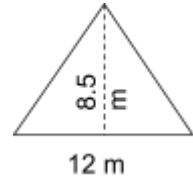


14.



15. A triangular park is being built.

a) What should be the area of the grass to be placed on the park?



b) If the grass costs \$45/m², how much will it cost to place the grass bed over the park?

16. The area of a triangle is 60 cm². If the base is 15 cm long what is the height of the triangle?

17. What is the area of a triangular enclosure of base 20m and height 15m

- Homework: Please complete questions 1, 2, 3, 4, 5, 6, 7 on page 223 from the textbook and complete this handout.